








Vypočítej příklady a zjisti, kolik je v každém pytli brambor. Vybarvi pytle s největším a nejmenším množstvím brambor.



Vypočítej příklady:



$$9 \cdot 30 = \square$$

$$8 \cdot 60 = \square$$

$$80 \cdot 8 = \square$$

$$2 \cdot 50 = \square$$

$$4 \cdot 50 = \square$$

$$30 \cdot 6 = \square$$

$$70 \cdot 4 = \square$$

$$3 \cdot 30 = \square$$

$$40 \cdot 4 = \square$$

$$60 \cdot 3 = \square$$

$$6 \cdot 60 = \square$$

$$90 \cdot 3 = \square$$

$$2 \cdot 10 = \square$$

$$8 \cdot 40 = \square$$

$$70 \cdot 7 = \square$$

$$30 \cdot 8 = \square$$

$$6 \cdot 70 = \square$$

$$5 \cdot 40 = \square$$

$$7 \cdot 50 = \square$$

$$9 \cdot 80 = \square$$

$$60 \cdot 9 = \square$$

$$60 \cdot 2 = \square$$

$$20 \cdot 4 = \square$$

$$40 \cdot 8 = \square$$

$$30 \cdot 1 = \square$$

$$70 \cdot 9 = \square$$

$$6 \cdot 10 = \square$$

$$90 \cdot 9 = \square$$

$$30 \cdot 3 = \square$$

$$100 \cdot 3 = \square$$